

Year 4 Weekly Homework – Week 6

Topic: Anglo Saxons

Your homework is your choice! There are 9 challenges to choose from below. Please try and complete 6 challenges this week.

Challenge 1 (Literacy)

Present Perfect and Simple Past Verb Tenses

The present perfect tense is where the verb is formed using 'has' or 'have'. It describes an action that has already occurred but continues to happen, e.g. I **have** never been abroad, I **have** been a doctor for ten years, I **have** lost my passport.

Watch this clip as a reminder on what the present perfect tense is: <https://www.youtube.com/watch?v=oXgsVMC3tmo>

Put these verbs into the present perfect tense to complete each sentence. E.g.

I (break) my pencil so can I borrow your sharpener?

I have broken my pencil so can I borrow your sharpener?

1. You need to line up because the bell (ring).
2. Because Dad and I (trim) the hedge, it looks very neat now.
3. Mum says we can play out once we (finish) our homework.
4. If you (not bring) your wellies, you can't go play in the snow.
5. Rose looks nervous because she (not ride) a horse before.
6. We (climb) the mountain.

Challenge 2 (Art)

Draw and colour a picture of an Anglo-Saxon. What is he/she wearing? (You will need to research this first).

Here are some facts to start your research!

1. Wool, linen and silk were the only materials used in Anglo-Saxon clothes.
2. Very poor Anglo Saxons could not afford to wear shoes or trousers.
3. As Christianity became popular throughout Anglo-Saxon Britain, it was thought that women should have their heads covered.



Challenge 3 (Maths)

Multiplying and Dividing by 10 and 100

Look at the videos to help remind yourself how to multiply and divide by 10 or 100. Drawing a place value chart is VERY helpful when solving these questions.

<https://www.bbc.co.uk/bitesize/topics/z36tyrd/article/z2fkwx>

1. $5 \times 10 =$
2. $6 \times 100 =$
3. $7 \div 10 =$
4. $4 \times 10 =$
5. $70 \div 100 =$
6. $2 \times 100 =$
7. $28 \div 10 =$
8. $80 \div 100 =$
9. $30 \div 10 =$

Hundreds	Tens	Ones
2	1	0
	2	1


210 ÷ 10

Challenge 4 (History)

Anglo Saxons

Anglo-Saxons used to have an alphabet made up of 'runes'. The runes were all made of straight lines, which made them easier to carve. Runes were often carved on precious objects - like an ivory box - or on stone monuments. Sometimes runes told the maker's name.

Use the Anglo Saxon runes to write your name. Next, create a message for me to decipher using Runes!



Challenge 5 (Maths)

Complete the Ordering Money lesson on White Rose Maths (**Summer term – Week 2, Lesson 4**). Watch the video to begin with then complete the questions.



<https://whiterosemaths.com/homelearning/year-4/>

You don't need to print out the sheet as the questions can be written down instead. Answers are also on the website to check when you finish.


Question sheet: <https://wrm-13b48.kxcdn.com/wp-content/uploads/2020/homelearning/year-4/Lesson-4-Y4-Summer-Block-2-WO2-Ordering-money-2020.pdf>

Challenge 6 (Science)

In Science we would be learning about Living Things and their Habitats. This week, think about how animals are suited to their homes. For example, a bird's habitat is a nest high up in a tree to help prevent predators being able to reach them.


Find 2 ways in which each animal is adapted to its habitat:

1. A stick insect in a tree.
2. A polar bear in the Arctic.
3. A parrot in the rainforest.
4. A camel in the desert.



Challenge 7 (Computing)

Refresh your coding knowledge by completing this coding task. You have been invited into the robot bakery to help code a cake!



<https://www.bt.com/codeacake>

Challenge 8 (French)



We recently learnt the names of some farm animals in French. Draw a picture of each of these animals (you might need to watch this video to help remind you!) and write the French names for them underneath.

<https://www.youtube.com/watch?v=Pba8564WZ4M>

1. Cow
2. Goat
3. Pig
4. Horse
5. Sheep
6. Chicken

Extension: Can you fill in the missing gaps in these French words?

- Une v _ ch _
- Un c _ n _ rd
- Une p _ _ l _
- Un m _ _ t _ n

Challenge 9 (Geography)

Fairtrade

Fairtrade day was on the 9th May.

1. Find out where these Fairtrade products are typically grown.
2. From your research, which countries produce the most Fairtrade products?
3. Find these countries on a map!

Bananas
Coffee
Tea
Pineapples
Cocoa
Honey
Sugar
Mangoes



Remember:

- Weekly spellings are also posted on the school website.
- Keep practising your times tables using Times Table Rockstars.
- Find a book you enjoy reading on Bug Club or at home. Can you read a paragraph out loud with expression to your grown up?